



SpeedLabs

MATHS

CBSE 8th

TEEVRA EDUTECH PVT. LTD.

Q.1 A survey was made to find the type of music that a certain group of young people liked in a city.

Adjoining pie chart shows the findings of this survey. From this pie chart answer the following:

- (i) If 20 people liked classical music, how many young people were surveyed?
- (ii) Which type of music is liked by the maximum number of people?
- (iii) If a cassette company were to make 1000 CD's, how many of each type would they make?

Sol: (i) 10% represents 100 people. Therefore 20% represents $= \frac{10 \times 1000}{10} = 200$ people

Hence, 200 people were surveyed.

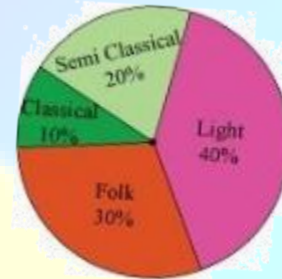
(ii) Light music is liked by the maximum number of people.

(iii) CD's of classical music $= \frac{10 \times 1000}{100} = 200$

CD's of semi classical music $= \frac{20 \times 1000}{100} = 200$

CD's of light music $= \frac{40 \times 1000}{100} = 400$

CD's of folk music $= \frac{30 \times 1000}{100} = 300$



Q.2 A group of 360 people were asked to vote for their favorite season from the three season's rainy, winter and summer.

- (i) Which season got the most votes?
- (ii) Find the central angle of each sector.
- (iii) Draw a pie chart to show this information.

| Season | Number of votes |
|--------|-----------------|
| Summer | 90 |
| Rainy | 120 |
| Winter | 150 |

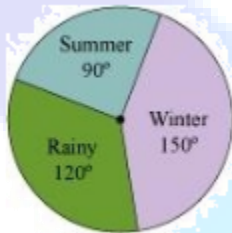
Sol: (i) Winter season got the most votes.

(ii) Central angle of summer season = $\frac{90 \times 360^\circ}{360} = 90^\circ$

Central angle of rainy season = $\frac{120 \times 360^\circ}{360} = 120^\circ$

Central angle of winter season = $\frac{150 \times 360^\circ}{360} = 150^\circ$

(iii)



Q.3 Draw a pie chart showing the following information.

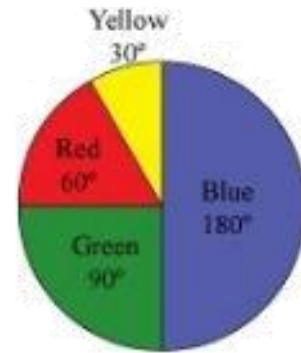
The table shows the colour preferred by a group of people.

| Colours | Number of people |
|--------------|------------------|
| Blue | 18 |
| Green | 9 |
| Red | 6 |
| Yellow | 3 |
| Total | 36 |

Sol: We have to find the proportion of each sector. For example,

Blue is $\frac{18}{36} = \frac{1}{2}$; Green is $\frac{9}{36} = \frac{1}{4}$ and so on. Use this to find the corresponding angles.

| Colours | Number of people | In fraction | Central angle |
|---------|------------------|-----------------|--|
| Blue | 18 | $\frac{18}{36}$ | $\frac{18}{36} \times 360^\circ = 180^\circ$ |
| Green | 9 | $\frac{9}{36}$ | $\frac{9}{36} \times 360^\circ = 90^\circ$ |
| Red | 6 | $\frac{6}{36}$ | $\frac{6}{36} \times 360^\circ = 60^\circ$ |
| Yellow | 3 | $\frac{3}{36}$ | $\frac{3}{36} \times 360^\circ = 30^\circ$ |



Q.4 The adjoining pie chart gives the marks scored in an examination by a student in Hindi, English, Mathematics, Social Science and Science. If the total marks obtained by the students were 540, answer the following question:

(i) In which subject did the student score 105 marks?

(Hint: for 540 marks, the central angle = 360° .)

So, for 105 marks, what is the central angle?)



(ii) How many more marks were obtained by the student in Mathematics than in Hindi?

(iii) Examine whether the sum of the marks obtained in Social Science and Mathematics is more than that in Science and Hindi. (Hint. Just study the central angles).

Sol:

| Subject | Central angle | Marks obtained |
|-------------|---------------|--|
| Mathematics | 90° | $\frac{90^\circ}{360^\circ} \times 540 = 135^\circ$ |
| S. Science | 65° | $\frac{65^\circ}{360^\circ} \times 540 = 97.5^\circ$ |
| Science | 80° | $\frac{80^\circ}{360} \times 540 = 20^\circ$ |
| Hindi | 70° | $\frac{70^\circ}{360^\circ} \times 540 = 105^\circ$ |
| English | 55° | $\frac{55^\circ}{360^\circ} \times 540 = 82.5^\circ$ |

(i) The student scored 105 marks in Hindi.

(ii) Marks obtained in Mathematics = 135.

Marks obtained in Hindi = 105.

Difference = $135 - 105 = 30$.

Thus, 30 more marks were obtained by the student in mathematics than in Hindi.

(iii) The sum of the marks in Social Science and Mathematics = $97.5 + 135 = 232.5$

The sum of the marks in Science and Hindi = $120 + 105 = 225$

Yes, the sum of the marks in Social Science and Mathematics is more than that in Science and Hindi.

Q.5 The number of students in a hostel, speaking different languages is given below. Display the data in a pie chart.

| Language | Hindi | English | Marathi | Tamil | Bengali | Total |
|--------------------|-------|---------|---------|-------|---------|-------|
| Number of students | 40 | 12 | 9 | 7 | 4 | 72 |

Sol:

| Language | Number of students | In fraction | Central angle |
|----------|--------------------|-----------------|--|
| Hindi | 40 | $\frac{40}{72}$ | $\frac{40}{72} \times 360^\circ = 200^\circ$ |
| English | 12 | $\frac{12}{72}$ | $\frac{12}{72} \times 360^\circ = 60^\circ$ |
| Marathi | 9 | $\frac{9}{72}$ | $\frac{9}{72} \times 360^\circ = 45^\circ$ |
| Tamil | 7 | $\frac{7}{72}$ | $\frac{7}{72} \times 360^\circ = 35^\circ$ |
| Bengali | 4 | $\frac{4}{72}$ | $\frac{4}{72} \times 360^\circ = 20^\circ$ |

Pie chart at above given data.

