

Board – ICSE

Class – IX

Topic – Circle

1. P and Q are any two points lying on the sides DC and AD respectively of a parallelogram ABCD. Show that area of $\Delta APB =$ area of ΔBQC .

Solution:

Given a parallelogram ABCD, and P and Q are points lying on the sides DC and AD respectively as shown in the adjoining figure. As ΔAPB and || gm ABCD are on the same base and between the same parallels AB and DC,

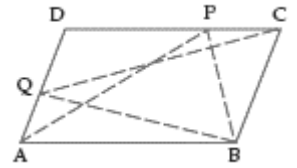
$$\text{area of } \Delta APB = \frac{1}{2} \text{ area of || gm ABCD ... (i)}$$

Also, as ΔBQC and || gm ABCD are on the same BC and between the same parallels AD and BC,

$$\text{area of } \Delta BQC = \frac{1}{2} \text{ area of || gm ABCD ... (ii)}$$

From (i) and (ii), we get

$$\text{Area of } \Delta APB = \text{area of } \Delta BQC.$$



2. In the adjoining figure, ABCD is a rectangle with sides AB = 8 cm and AD = 5 cm. Compute

(i) Area of parallelogram ABEF

(ii) Area of ΔEFG .

Solution:

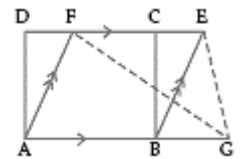
(i) Area of || gm ABEF = area of rectangle ABCD (on the same base AB and between the same parallels AB and DE)

$$= (8 \times 5) \text{ cm}^2 = 40 \text{ cm}^2.$$

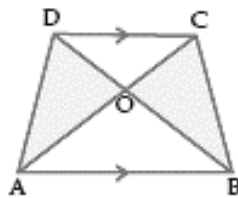
(ii) Area of $\Delta EFG = \frac{1}{2} \times$ area of || gm ABEF

(On the same base FE and between the same parallels FE and AG)

$$= \left(\frac{1}{2} \times 40\right) \text{ cm}^2 = 20 \text{ cm}^2$$



3. ABCD is a trapezium with $AB \parallel DC$, and diagonals AC and BD meet at O. Prove that area of $\Delta DAO =$ area of ΔOBC .



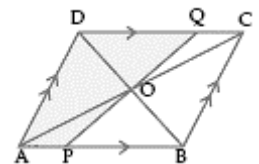
Solution:

Statements	Reasons
1. $AB \parallel DC$	1. Given.
2. Area of $\Delta ABD =$ area of ΔABC	2. Δ s on the same base AB and between the same parallels AB and CD are equal in area.
3. Area of $\Delta DAO +$ area of $\Delta OAB =$ area of $\Delta OBC +$ area of ΔOAB	3. Addition area axiom.
4. Area of $\Delta DAO =$ area of ΔOBC Q.E.D.	4. Subtracting same area from both sides.

4. The diagonals of a parallelogram ABCD intersect at O. A straight line through O meets AB at P and the opposite side CD at Q. Prove that area of quad. APQD = $\frac{1}{2}$ Area of \parallel gm ABCD.

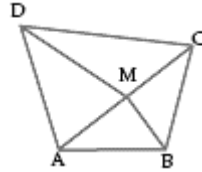
Solution:

Statements	Reasons
1. Area of $\Delta ACD = \frac{1}{2}$ area of \parallel gm ABCD	1. Diagonal divides a \parallel gm into two Δ s of equal area.
In ΔOAP and ΔOCQ	
2. $\angle OAP = \angle OCQ$	2. Alt. \angle s.
3. $\angle AOP = \angle COQ$	3. Vert. opp. \angle s.
4. $AO = OC$	4. Diagonals bisect each other.
5. $\Delta OAP \cong \Delta OCQ$	5. ASA rule of congruency.
6. Area of $\Delta OAP =$ area of ΔOCQ	6. Congruence area axiom.
7. Area of $\Delta OAP +$ area of quad. AOQD = area of $\Delta OCQ +$ area of quad. AOQD	7. Adding same area on both sides.
8. Area of quad. APQD = area of ΔACD	8. Addition area axiom.
9. Area of quad. APQD = $\frac{1}{2}$ area of \parallel gm ABCD Q.E.D.	9. From 8 and 1.



5. In quadrilateral ABCD, M is mid-point of the diagonal AC. Prove that area of quad. ABMD = area of quad. DMBC.

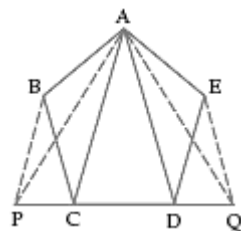
of



Solution:

Statements	Reasons
1. BM is median of $\triangle BCA$	1. M is mid-point of AC (given).
2. Area of $\triangle ABM$ = area of $\triangle MBC$	2. Median divides a \triangle into two \triangle s of equal area.
3. DM is median of $\triangle DAC$	3. M is mid-point of AC (given).
4. Area of $\triangle DAM$ = area of $\triangle DMC$	4. Median divides a triangle into two \triangle s of equal area.
5. Area of $\triangle ABM$ + area of $\triangle DAM$ = area of $\triangle MBC$ + area of $\triangle DMC$	5. Adding 2 and 4.
6. Area of quad. ABMD = area of quad. DMBC Q.E.D.	6. Addition area axiom.

6. In the adjoining figure, ABCDE is any pentagon. BP drawn parallel to AC meets DC produced at P and EQ drawn parallel to AD meets CD produced at Q. Prove that area of ABCDE = area of $\triangle APQ$.



Solution:

$\triangle PCA$ and $\triangle BCA$ are on the same base CA and between same parallels $BP \parallel AC$.

\therefore Area of $\triangle BCA$ = area of $\triangle PCA$... (i)

$\triangle EAD$ and $\triangle QAD$ are on the same base AD and between same parallels $EQ \parallel AD$,

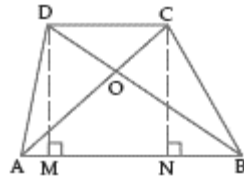
\therefore Area of $\triangle EAD$ = area of $\triangle QAD$... (ii)

Also, area of $\triangle ACD$ = area of $\triangle ACD$... (iii)

On adding (i), (iii) and (ii), we get area of $\triangle BCA$ + area of $\triangle ACD$ + area of $\triangle EAD$
= area of $\triangle PCA$ + area of $\triangle ACD$ + area of $\triangle QAD$

\Rightarrow Area of ABCDE = area of ΔAPQ .

7. The diagonals AC and BD of a quadrilateral ABCD intersect at O in such a way that area of $\Delta OAD =$ area of ΔOBC . Prove that ABCD is a trapezium.



Solution:

Draw $DM \perp AB$ and $CN \perp AB$.

As DM and CN are both perpendiculars to AB, therefore, $DM \parallel CN$.

Given area of $\Delta OAD =$ area of ΔOBC

\Rightarrow Area of $\Delta OAD +$ area of $\Delta OAB =$ area of $\Delta OBC +$ area of ΔOAB

(adding same area on both sides)

\Rightarrow Area of $\Delta ABD =$ area of ΔABC

$$\Rightarrow \frac{1}{2}AB \times DM = \frac{1}{2}AB \times CN$$

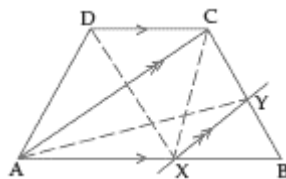
$\Rightarrow DM = CN$.

Thus $DM \parallel CN$ and $DM = CN$, therefore, DMNC is a parallelogram

$\Rightarrow DC \parallel MN$ i.e. $DC \parallel AB$.

Hence, ABCD is a trapezium.

8. ABCD is a trapezium with $AB \parallel DC$. A line parallel to AC intersects AB at X and BC at Y. Prove that: area of $\Delta ADX =$ area of ΔACY .



Solution:

Join CX.

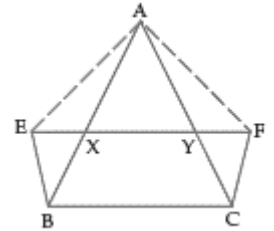
As triangles ADX and ACX have same base AX and are between the same
 Parallels ($AB \parallel DC$ given, so, $AX \parallel DC$),

$$\therefore \text{Area of } \triangle ADX = \text{area of } \triangle ACX \quad \dots \text{ (i)}$$

As triangles $\triangle ACY$ and $\triangle ACX$ have same base AC and are between the same parallels ($XY \parallel AC$ given),

$$\therefore \text{Area of } \triangle ACY = \text{area of } \triangle ACX \quad \dots \text{ (ii)}$$

From (i) and (ii), we get area of $\triangle ADX = \text{area of } \triangle ACY$.



9. **XY is a line parallel to side BC of a triangle ABC . If $BE \parallel CA$ and $FC \parallel AB$ meet XY at E and F respectively, show that area of $\triangle ABE = \text{area of } \triangle ACF$.**

Solution:

As $\triangle ABE$ and \parallel gm $EBCY$ have the same base BE and are between the same parallels $BE \parallel CA$ (given),

$$\therefore \text{Area of } \triangle ABE = \frac{1}{2} \times \text{Area of } \parallel \text{ gm } EBCY \quad \dots \text{ (i)}$$

As $\triangle ACF$ and \parallel gm $XBCF$ have the same base CF and are between the same parallels $FC \parallel AB$ (given),

$$\therefore \text{Area of } \triangle ACF = \frac{1}{2} \times \text{Area of } \parallel \text{ gm } XBCF \quad \dots \text{ (ii)}$$

But \parallel gm $EBCY$ and \parallel gm $XBCF$ have the same base BC and are between the same parallels ($XY \parallel BC$ given),

$$\therefore \text{Area of } \parallel \text{ gm } EBCY = \text{area of } \parallel \text{ gm } XBCF$$

$$\Rightarrow \frac{1}{2} \times \text{Area of } \parallel \text{ gm } EBCY = \frac{1}{2} \times \text{Area of } \parallel \text{ gm } XBCF$$

$$\Rightarrow \text{Area of } \triangle ABE = \text{area of } \triangle ACF$$

10. **In the adjoining figure, $PQRS$ and $PXYZ$ are two parallelograms of equal SX is parallel to YR .**

Solution:

Join XR, SY .

Given area of \parallel gm $PQSR = \text{area of } \parallel$ gm $PXYZ$.

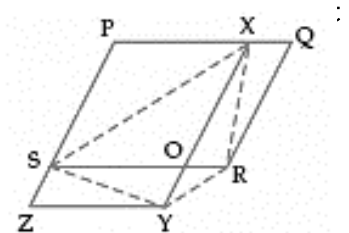
Subtract area of \parallel gm $PSOX$ from both sides.

$$\therefore \text{Area of } \parallel \text{ gm } XORQ = \text{area of } \parallel \text{ gm } SZYO$$

$$\Rightarrow \text{Area of } \triangle$$

$XOR = \text{area of } \triangle SYO$ (because diagonal divides a \parallel gm into two equal areas)

Adding area of $\triangle OYR$ to both sides, we get area of $\triangle XYR = \text{area of } \triangle SYR$.



Also the Δ s XYR and SYR have the same base YR, therefore, these lie between the same
 Parallels \Rightarrow SX is parallel to YR.

11. In the adjoining figure, ABCD, DCFE and ABFE are parallelograms. Show that area of $\Delta ADE =$ area of ΔBCF .

Solution:

As ABCD is a parallelogram, $AD = BC$ (opp. sides of a || gm)

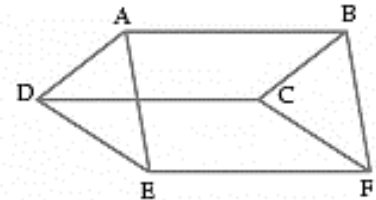
Similarly, $DE = CF$ and $AE = BF$.

In ΔADE and ΔBCF ,

$AD = BC$, $DE = CF$ and $AE = BF$

$\therefore \Delta ADE \cong \Delta BCF$ (by SSS rule of congruency)

\therefore Area of $\Delta ADE =$ area of ΔBCF (congruent figures have equal areas)



12. Triangles ABC and DBC are on the same base BC with A, D on opposite sides of BC. If area of $\Delta ABC =$ area of ΔDBC , prove that BC bisects AD.

Solution:

Let BC and AD intersect at O.

Draw $AM \perp BC$ and $DN \perp BC$.

Given area of $\Delta ABC =$ area of ΔDBC

$$\Rightarrow \frac{1}{2} BC \times AM = \frac{1}{2} BC \times DN$$

$$\Rightarrow AM = DN.$$

In ΔAMO and ΔDNO ,

$\angle AOM = \angle DON$ (vert. opp. \angle s)

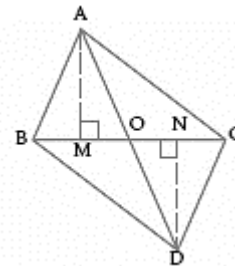
$\angle AMO = \angle DNO$ (each angle = 90°)

$AM = DN$ (proved above)

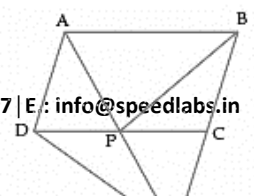
$\therefore \Delta AMO \cong \Delta DNO$ (AAS rule of congruency)

$\therefore AO = DO$ (c.p.c.t.)

Hence, BC bisects AD.



13. In the adjoining figure, ABCD is a parallelogram and BC is produced to a point



Q such that $CQ = AD$. If AQ intersects DC at P , show that area of $\Delta BPC = \text{area of } \Delta DPQ$.

Solution:

Join AC . As triangles BPC and APC have same base PC and are between the same parallels ($AB \parallel DC$ i.e. $AB \parallel PC$),

$\therefore \text{Area of } \Delta BPC = \text{area of } \Delta APC \dots (i)$

In quad. $ADQC$, $AD \parallel CQ$

($\because AD \parallel BC$, opp. sides of \parallel gm $ABCD$)

$AD = CQ$ (given)

$\therefore ADQC$ is a parallelogram, so its diagonals AQ and DC bisect each other

i.e. $DP = PC$ and $AP = PQ$.

In ΔAPC and ΔQPD , $PC = DP$

$AP = PQ$

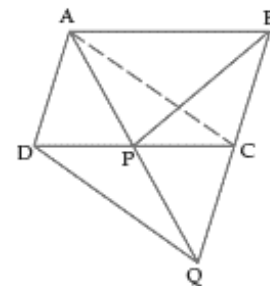
$\angle APC = \angle QPD$ (vert. opp. \angle s)

$\Delta APC \cong \Delta QPD$

$\therefore \text{Area of } \Delta APC = \text{area of } \Delta DPQ \dots (ii)$

From (i) and (ii), we get

Area of $\Delta BPC = \text{area of } \Delta DPQ$.



14. ABC is a triangle whose area is 50 cm^2 . E and F are mid-points of the sides AB and AC respectively. Prove that $EBCF$ is a trapezium. Also find its area.

Solution:

Since E and F are mid-points of the sides AB and AC respectively,

$EF \parallel BC$ and $EF = \frac{1}{2} BC$.

$2 EF = BC$.

As $EF \parallel BC$, $EBCF$ is a trapezium.

From A , draw $AM \perp BC$.

Let AM meet EF at N .

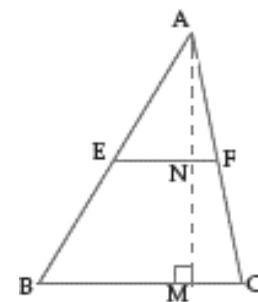
Since $EF \parallel BC$, $\angle ENA = \angle BMN$.

But $\angle BMN = 90^\circ$ ($\because AM \perp BC$)

So $\angle ENA = 90^\circ$ i.e. $AN \perp EF$.

Also, as E is mid-point of AB and $EN \parallel BM$, N is mid-point of AM .

Now, area of $\Delta AEF = \frac{1}{2} EF \times AN = \frac{1}{2} \left(\frac{1}{2} BC \times \frac{1}{2} AM \right) = \frac{1}{4} \left(\frac{1}{2} BC \times AM \right) = \frac{1}{4} (\text{area of } \Delta ABC)$



$$= \frac{1}{4}(50\text{cm}^2) = 12.5\text{ cm}^2.$$

∴ Area of trapezium EBCF = area of ΔABC – area of ΔAEF

$$= 50\text{ cm}^2 - 12.5\text{ cm}^2 = 37.5\text{ cm}^2.$$

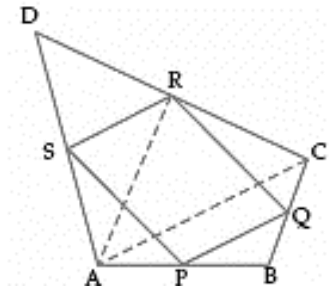
15. Prove that the area of the quadrilateral formed by joining the mid-points of the adjacent sides of a quadrilateral is half the area of the given quadrilateral.

Solution:

A quadrilateral ABCD, and PQRS is the quadrilateral formed by joining mid-points of the sides AB, BC, CD and DA respectively.

To prove: Area of quad. PQRS = $\frac{1}{2}$ area of quad. ABCD.

Construction: Join AC and AR.



Proof:

Statements	Reasons
1. Area of $\Delta ARD = \frac{1}{2}$ area of ΔACD	1. Median divides a triangle into two triangles of equal area.
2. Area of $\Delta SRD = \frac{1}{2}$ area of ΔARD	2. Same as in 1.
3. Area of $\Delta SRD = \frac{1}{4}$ area of ΔACD	3. From 1 and 2.
4. Area of $\Delta PBQ = \frac{1}{4}$ area of ΔABC	4. As in 3.
5. Area of ΔSRD + area of ΔPBQ = $\frac{1}{4}$ (area of ΔACD + area of ΔABC)	5. Adding 3 and 4.
6. Area of ΔSRD + area of ΔPBQ = $\frac{1}{4}$ area of quad. ABCD	6. Addition area axiom.
7. Area of ΔAPS + area of ΔQCR = $\frac{1}{4}$ area of quad. ABCD	7. Same as in 6.
8. Area of ΔAPS + area of ΔPBQ + area of ΔQCR + area of $\Delta SRD = \frac{1}{2}$ area of quad. ABCD	8. Adding 6 and 7.
9. Area of ΔAPS + area of ΔPBQ + area of ΔQCR + area of ΔSRD + area of quad. PQRS = area of quad. ABCD	9. Addition area axiom.
10. Area of quad. PQRS = $\frac{1}{2}$ area of quad. ABCD Q.E.D.	10. Subtracting 8 from 9.