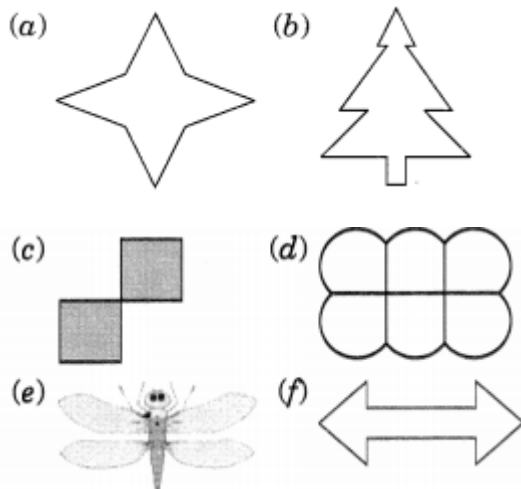
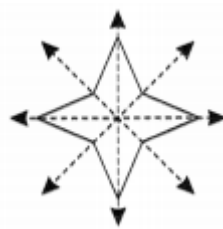


### Exercise 13.3

1. Find the number of lines of symmetry in each of the following shapes.  
How will you check your answer?



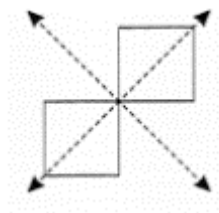
**Ans.** (a) The given figure has 4 lines of symmetry.



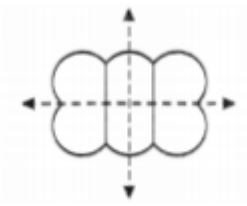
(b) The given figure has only one line of symmetry.



(c) The given figure has two lines of symmetry.



(d) The given figure has two lines of symmetry.



(e) This figure has only one line of symmetry.



(f) The given figure has two lines of symmetry.

