

Exercise -5.6

Q1. Name the types of following triangles:

- (a) Triangle with length of sides 7 cm, 8 cm and 9 cm.
- (b) $\triangle ABC$ with $AB = 8.7$ cm, $AC = 7$ cm and $BC = 6$ cm.
- (c) $\triangle PQR$ such that $PQ = QR = PR = 5$ cm.
- (d) $\triangle DEF$ with $\angle D = 90^\circ$
- (e) $\triangle XYZ$ with $\angle Y = 90^\circ$ and $XY = YZ$.
- (f) $\triangle LMN$ with $\angle L = 30^\circ$, $\angle M = 70^\circ$, and $\angle N = 80^\circ$.

Sol. (a) Lengths of the sides of a triangle are given as 7 cm, 8 cm, and 9 cm.

Since the length of all sides of the given triangle are different, it is a Scalene triangle.

(b) Given that: $AB = 8.7$ cm, $AC = 7$ cm and $BC = 6$ cm

Here $AB \neq AC \neq BC$ Hence, $\triangle ABC$ is Scalene triangle.

(c) Given that: $PQ = QR = PR = 5$ cm

Since all the sides are equal.

Hence, it is an equilateral triangle.

(d) Given that: In $\triangle DEF$, $\angle D = 90^\circ$

Hence it is a right angled triangle.

(e) Given that: In $\triangle XYZ$, $\angle Y = 90^\circ$ and $XY = YZ$

Hence it is a right angled triangle.

(f) Given that: $\triangle LMN$, $\angle L = 30^\circ$, $\angle M = 70^\circ$ and $\angle N = 80^\circ$.

Hence it is an acute-angled triangle.

Q2. Match the following:

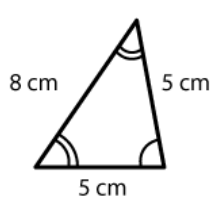
Measure of triangle

Type of triangle

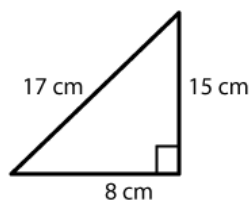
- | | |
|--|----------------------------|
| (i) 3 sides of equal length | (a) Scalene |
| (ii) 2 sides of equal length | (b) Isosceles right angled |
| (iii) All sides are of different length | (c) Obtuse angled |
| (iv) 3 acute angles | (d) Right angled |
| (v) 1 right angle | (e) Equilateral |
| (vi) 1 obtuse angle | (f) Acute angled |
| (vii) 1 right angle with two sides of equal length | (g) Isosceles |

- Sol.**
- (i) ↔ (e)
 - (ii) ↔ (g)
 - (iii) ↔ (a)
 - (iv) ↔ (f)
 - (v) ↔ (d)
 - (vi) ↔ (c)
 - (vii) ↔ (b)

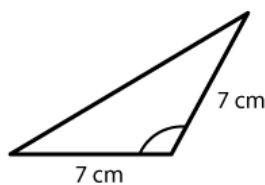
Q3. Name each of the following triangles in two different ways: (You may judge the nature of the angle by observation)



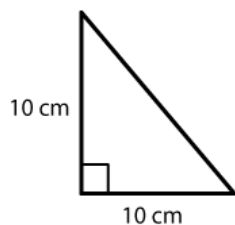
(i)



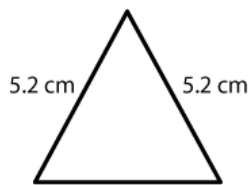
(ii)



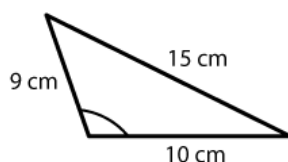
(iii)



(iv)



(v)

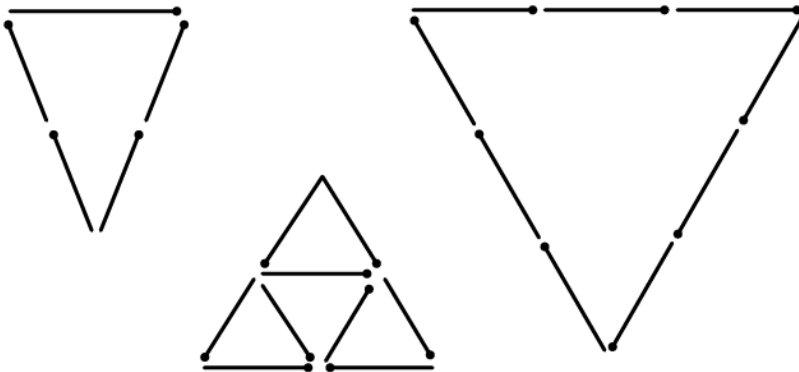


(vi)

- Sol.**
- (a) (i) Acute angled triangle
 - (ii) Isosceles triangle
 - (b) (i) Right angled triangle

- (ii) Scalene triangle
- (c) (i) Obtuse angled triangle
- (ii) Isosceles triangle
- (d) (i) Right angled triangle
- (ii) Isosceles triangle
- (e) (i) Acute angled triangle
- (ii) Equilateral triangle
- (f) (i) Obtuse angled triangle
- (ii) Scalene triangle.

Q4. Try to construct triangles using matchsticks. Some are shown here.



Can you make a triangle with

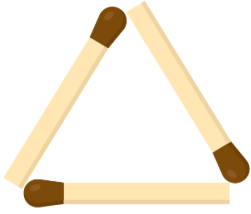
- (a) 3 matchsticks?
- (b) 4 matchsticks?
- (c) 5 matchsticks?
- (d) 6 matchsticks?

(Remember you have to use all the available matchsticks in each case)

Name the type of triangle in each case.


If you cannot make a triangle, give reasons for it.

Sol. (a) Yes, we can make an equilateral triangle with 3 matchsticks.



(b) No, we cannot make a triangle with 4 matchsticks.

(c) Yes, we can make an isosceles triangle with five matchsticks.



(d) Yes, we can make an equilateral triangle with 6 matchsticks.

